




Use the units provided to measure the width of each of the bars.

Answers



1. _____




2. _____



3. _____



4. _____



5. _____



6. _____



7. _____



8. _____






9. _____



10. _____



Use the units provided to measure the width of each of the bars.



Answers

1. 10

2. 1

3. 4

4. 8

5. 13

6. 7

7. 9

8. 11

9. 5

10. 3

